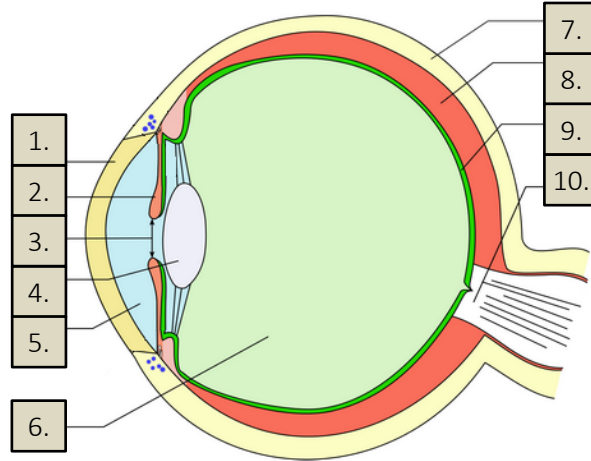




| | |
|------------------------|---------------------|
| MOCK TEST 1 | L'œil humain |
|------------------------|---------------------|

Exercice 1 (10 points) Nommer les parties de l'œil : *Name the parts of the eye:*



| | | | |
|----|--|-----|--|
| 1. | | 6. | |
| 2. | | 7. | |
| 3. | | 8. | |
| 4. | | 9. | |
| 5. | | 10. | |

Exercice 2 (8 points) Compléter :

a) Fil électrique qui relie l'œil au cerveau :
Electric wire that connects the eye to the brain:

b) Coque extérieure très solide :
Very solid outer shell:

c) Couche qui assure la nutrition de l'œil :
Layer that provides nutrition to the eye:

d) Membrane qui reçoit les rayons lumineux :
Membrane that receives light rays:

e) Lentille naturelle de l'œil :
Natural lens of the eye:

f) Ouverture par laquelle passe la lumière :
Aperture through which light passes:

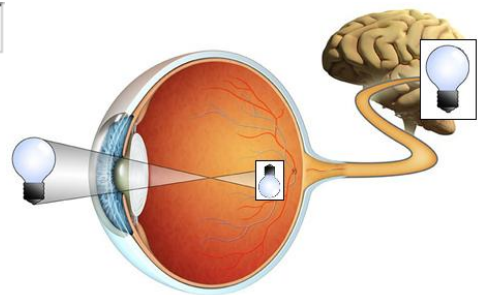
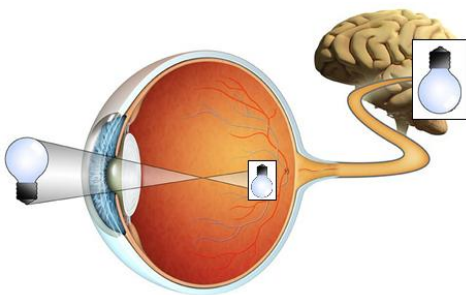
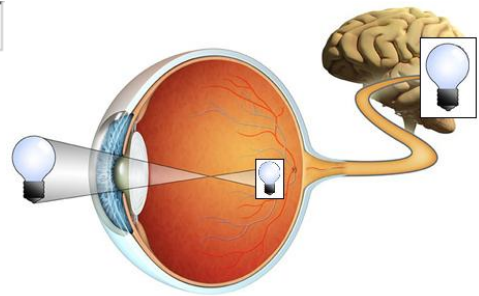
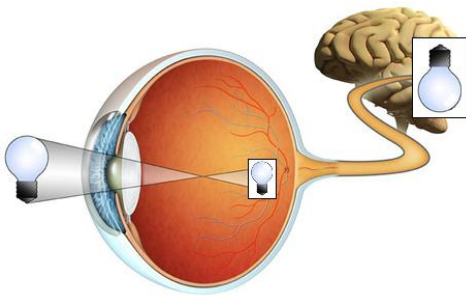
g) Donne la couleur de nos yeux :
Give the color of our eyes:

h) Vitre naturelle, lavée par les larmes :
Natural glass, washed by tears:

Exercice 3 (2 points) Quel schéma est correct ?

Which diagram is correct?

a)



b)

