

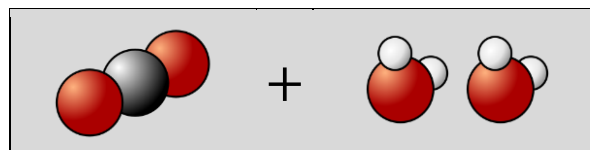
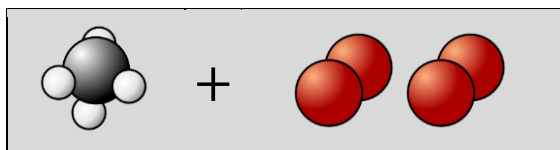
Name: _____

PHYS 8



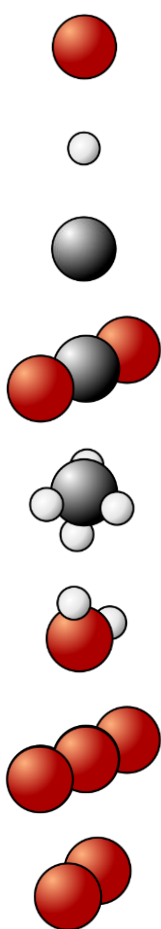
Test 2

Principe de combustion



Exercise 1

Give the name of each molecule:



Exercise 2 (4 points)

Complete the sentences.

The chemical symbol 3O_2 means that we have

molecules of

Then each molecule is made of

atoms of

Exercise 3 (1 point)

Make a drawing corresponding to The chemical symbol 3O_2 :

--